

Year 4 Maths Activity Mat

2

Section 1


A football match lasts 105 minutes. It finishes at 3:15pm. What time did it start?

Section 3

A book costs £5. There is a buy one get one half price offer on. How much would Jim pay for two books?

Section 4

Write the time in words and numbers.



numbers:

words:

.....

.....

Section 2

Draw coins to make 79p.

Section 5

Fill in the missing boxes:

÷ 3 = 3

÷ 8 = 9

Section 7

Draw a shape with:

- at least one diagonal line;
- at least 2 vertical lines;
- at least 2 horizontal lines.

Section 8

Work out:

$$\begin{array}{r} 5 \overline{) 105} \end{array}$$

$$\begin{array}{r} 3 \overline{) 54} \end{array}$$

Section 6

Change these amounts of money from pence to pounds.

$$1204\text{p} = \boxed{}$$

$$7022\text{p} = \boxed{}$$

Year 4 Maths Activity Mat: 2

Answers

Section 1

A football match lasts 105 minutes. It finishes at 3:15pm. What time did it start?

1:30pm


Section 3

A book costs £5. There is a buy one get one half price offer on. How much would Jim pay for two books?

£7.50

Section 4

Write the time in words and numbers.



numbers: 2:35

words: Twenty-five minutes to three OR

Thirty-five minutes past two

Section 2

Draw coins to make 79p.

Example:



Section 5

Fill in the missing boxes:

$$\boxed{9} \div 3 = 3$$

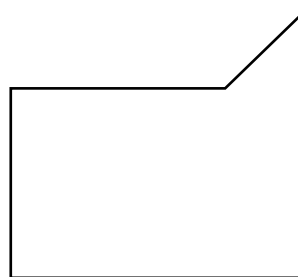
$$\boxed{72} \div 8 = 9$$

Section 7

Draw a shape with:

- at least one diagonal line;
- at least 2 vertical lines;
- at least 2 horizontal lines.

Example:



Section 8

Work out:

$$\begin{array}{r} 2 1 \\ 5 \overline{) 105} \end{array}$$

$$\begin{array}{r} 1 8 \\ 3 \overline{) 54} \end{array}$$